

Year 2

Maths homework

Autumn 1

In this booklet, we will concentrate on revision of number bonds to 10 and 20, reading and writing numbers up to 100, counting in 2s, 3s, 5s and 10s and regular basic skills practice.

The aim is to increase the speed and confidence of your child's maths.

Please try to do 1 sheet per week as part of your child's homework tasks.

This booklet should be handed back into school by Friday 23rd October.

A copy can be found on our Homework section on our school website...just incase!

<http://www.st-margarets.durham.sch.uk/homework/>

Date: _____

Big Maths practice sheet

Can you fill in these sums?

$7 + 4 =$	$2 \times 2 =$
$8 + 4 =$	$7 \times 2 =$
$9 + 4 =$	$9 \times 2 =$
$7 + 5 =$	$2 \times 7 =$
$8 + 5 =$	$2 \times 6 =$
$9 + 5 =$	$2 \times 3 =$
$7 + 6 =$	$5 \times 2 =$
$8 + 6 =$	$2 \times 5 =$
$9 + 6 =$	$4 \times 2 =$
$4 + 8 =$	$2 \times 10 =$

Count on in tens. The first one has been done for you.

24	34	44	54	64	74
-----------	-----------	-----------	-----------	-----------	-----------

37					
-----------	--	--	--	--	--

16					
-----------	--	--	--	--	--

Now try counting back in tens:

99					
-----------	--	--	--	--	--

63					
-----------	--	--	--	--	--

58					
-----------	--	--	--	--	--

Date: _____

Tens and Ones

Write how many tens and ones are in these numbers. The first one has been done for you.

48	four tens and eight ones
32	
56	
73	
21	
67	
40	
9	

Now write down the numbers that match these tens and ones.

The first one has been done for you.

63	six tens and three ones
	five tens and nine ones
	three tens and no ones
	no tens and seven ones
	eight tens and four ones
	four tens and one one
	nine tens and nine ones
	one ten and six ones

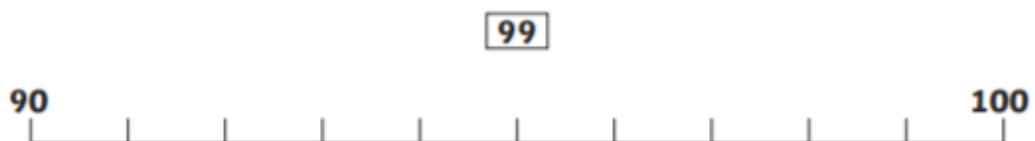
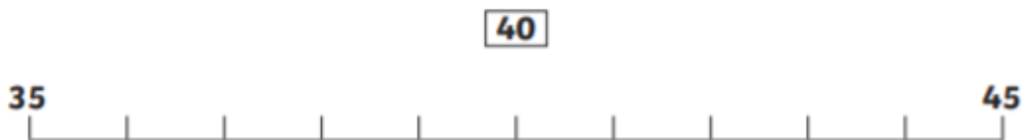
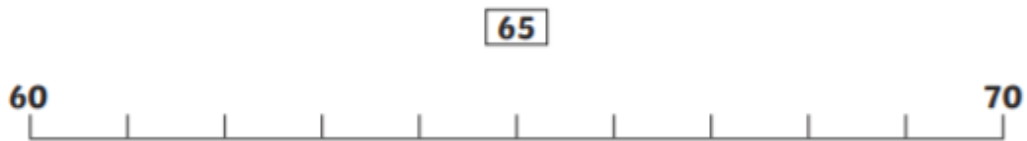
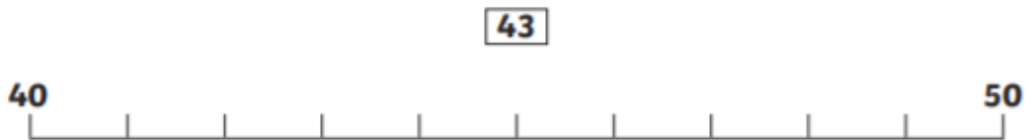
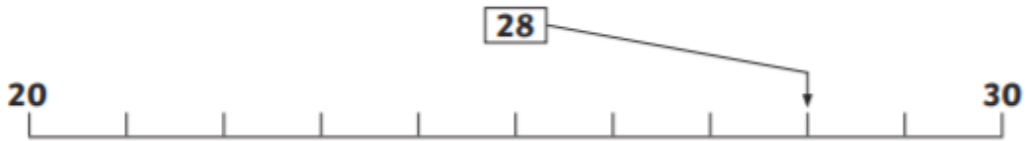
Date: _____

Big Maths practice sheet

Can you fill in these sums?

$3 + 9 =$	$4 \times 2 =$
$6 + 5 =$	$6 \times 2 =$
$7 + 4 =$	$2 \times 2 =$
$2 + 8 =$	$7 \times 2 =$
$4 + 6 =$	$2 \times 9 =$
$9 + 4 =$	$2 \times 7 =$
$3 + 8 =$	$8 \times 2 =$
$8 + 7 =$	$2 \times 3 =$
$7 + 7 =$	$5 \times 2 =$
$5 + 8 =$	$10 \times 2 =$

Draw arrows to show where the numbers belong on the number lines. The first one has been done for you.



Date: _____

Some of the numbers have fallen off the number square! How quickly can you put them back?

1		3	4		6	7		9	10
	12	13	14	15	16	17		19	
21				25		27	28		30
31		33	34		36	37	38	39	40
	42		44	45	46			49	
51	52	53		55		57	58	59	
61		63			66	67	68		70
71	72		74		76			79	80
	82	83	84	85		87	88	89	
91		93		95		97		99	100

Finding Numbers

100	45	37	29
66	54	3	90
21	78	85	16

In the table, can you find...?

A number between 30 and 40.	
A number that has 5 tens.	
A number that has no ones.	
A number that has three digits.	
A number that has the same number of tens and ones.	
A number that is 10 more than 75.	
A number that is 10 less than 31.	
A 'teens' number	

Date: _____

Fill in the missing numbers.

Number Bonds to 10

10	
6	4

10	
5	

10	
9	

10	
	3

10	
	8

10	
4	

Number Bonds to 20

20	
13	

20	
	10

20	
16	

20	
	3

20	
	8

20	
5	

Date: _____

Big Maths practice sheet

Can you fill in these sums?

$9 + 4 =$	$5 \times 1 =$
$5 + 4 =$	$8 \times 5 =$
$5 + 5 =$	$4 \times 5 =$
$9 + 9 =$	$5 \times 0 =$
$8 + 3 =$	$5 \times 9 =$
$7 + 5 =$	$2 \times 5 =$
$9 + 6 =$	$7 \times 5 =$
$3 + 9 =$	$5 \times 6 =$
$5 + 4 =$	$9 \times 5 =$
$7 + 8 =$	$5 \times 3 =$

Number Matching

Match the numbers to the words.

seven	47
thirty-four	13
fifty-three	79
forty-seven	100
eighty	7
ninety-one	34
one hundred	22
twenty-two	80
thirteen	91
seventy-nine	53